




Name _____

RECYCLING COUNT

Room 14 did a recycling project. They collected glass bottles, plastic bottles and cans. The graph shows how many they got in one week.

Bottle and Can Collection

Cans	
Glass bottles	
Plastic bottles	

 = 2 cans  = 2 glass bottles **Key**  = 2 plastic bottles

1. How many cans did they collect? (Hint: Count cans by twos.) _____
2. How many glass bottles did they collect? _____
3. How many plastic bottles did they collect? _____
4. The class collected _____ more cans than plastic bottles.
5. The class collected _____ objects in all.

Bonus:

Practice skip counting. Count by fives. Fill in the blanks below.

5 10 _____ 20 _____ 30 35 _____ _____ 50